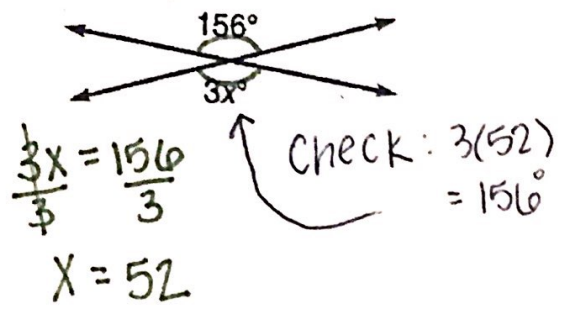
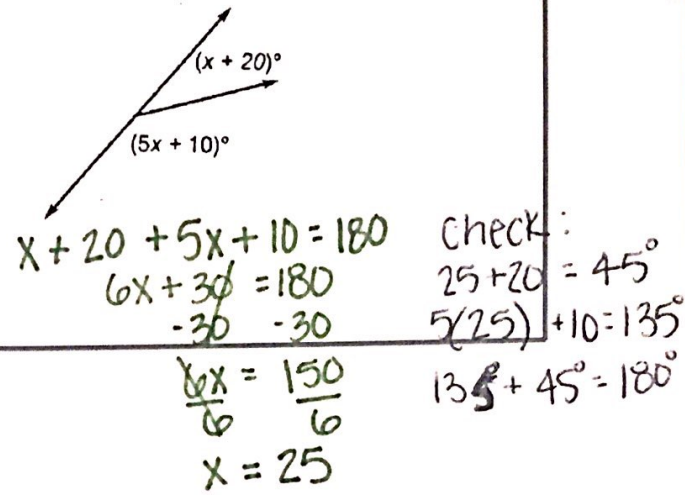


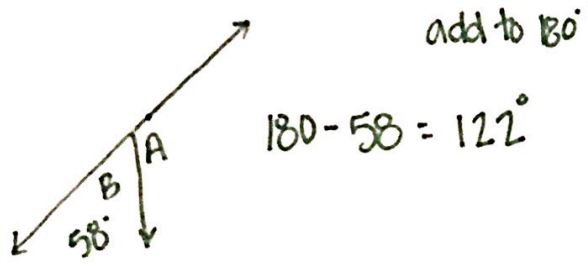
Find the measure of x.
What kind of angles are these? **vertical angles**



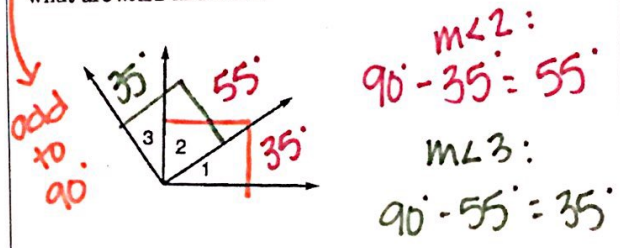
Find the measure of x.
What kind of angles are these? **Linear Pair**



Find the measure of an angle that is supplementary to $\angle B$ if the measure of $\angle B$ is 58.



If $\angle 2$ is complementary to $\angle 3$, $\angle 1$ is complementary to $\angle 2$, and $m\angle 1 = 35$, what are $m\angle 2$ and $m\angle 3$?



Find the measure of x and y

